



FOR OFFICIAL USE

--	--	--	--	--	--

National  
Qualifications  
2017

Mark

--

**X744/75/01**

**Lifeskills Mathematics  
Paper 1 (Non-Calculator)**

MONDAY, 29 MAY

1:00 PM – 1:50 PM



\* X 7 4 4 7 5 0 1 \*

Fill in these boxes and read what is printed below.

Full name of centre

--

Town

--

Forename(s)

--

Surname

--

Number of seat

--

Date of birth

Day

--	--

Month

--	--

Year

--	--

Scottish candidate number

--	--	--	--	--	--	--	--	--	--

**Total marks — 35**

Attempt ALL questions.

**You may NOT use a calculator.**

Full credit will be given only to solutions which contain appropriate working.

State the units for your answer where appropriate.

Write your answers clearly in the spaces provided in this booklet. Additional space for answers is provided at the end of this booklet. If you use this space you must clearly identify the question number you are attempting.

Use **blue** or **black** ink.

Before leaving the examination room you must give this book to the Invigilator; if you do not, you may lose all the marks for this paper.



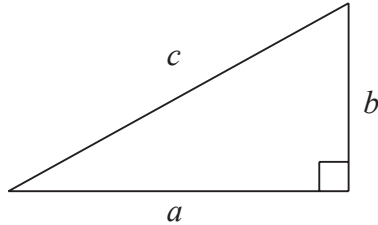
\* X 7 4 4 7 5 0 1 0 1 \*

## FORMULAE LIST

Circumference of a circle:  $C = \pi d$

Area of a circle:  $A = \pi r^2$

Theorem of Pythagoras:



$$a^2 + b^2 = c^2$$

Volume of a cylinder:  $V = \pi r^2 h$

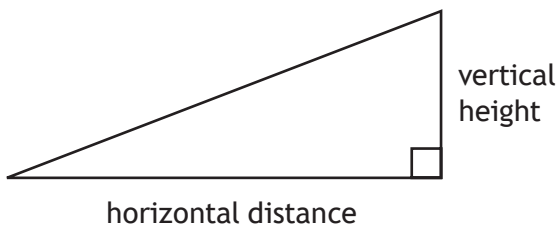
Volume of a prism:  $V = Ah$

Volume of a cone:  $V = \frac{1}{3} \pi r^2 h$

Volume of a sphere:  $V = \frac{4}{3} \pi r^3$

Standard deviation:  $s = \sqrt{\frac{\sum(x - \bar{x})^2}{n-1}} = \sqrt{\frac{\sum x^2 - (\sum x)^2/n}{n-1}}$ , where  $n$  is the sample size.

Gradient:



$$\text{gradient} = \frac{\text{vertical height}}{\text{horizontal distance}}$$



\* X 7 4 4 7 5 0 1 0 2 \*

Total marks — 35  
Attempt ALL questions

MARKS  
DO NOT  
WRITE IN  
THIS  
MARGIN

1. A wall is built using foam bricks which are  $194 \pm 2$  mm long.  
The wall is 50 bricks long.  
What is the minimum length of the wall?

2

2. Anna works as a sales person for a computer company.  
She is paid a basic monthly salary of £2450 plus commission of 2.5% on her monthly sales over £3000.

- (a) Calculate Anna's gross salary for April when her sales totalled £9000.

3

In her April payslip, she has the following deductions:

- Income Tax            £334.67
- National Insurance   £230.20
- Pension                £164.74

- (b) Calculate her net salary for April.

2

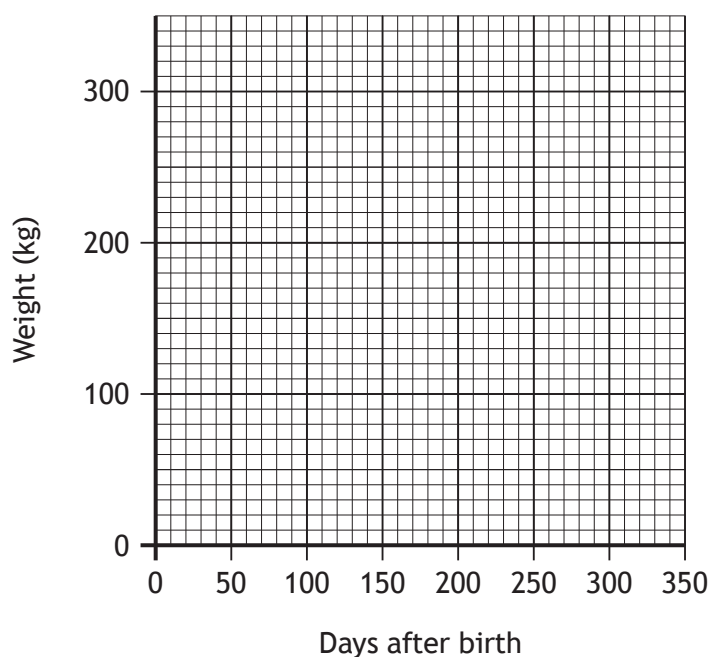


3. Scott is a farmer.  
 He records the weight of a calf from birth.  
 The weight of his calf is shown in the table below.

<b>Days after birth</b>	0	60	120	160	200	260
<b>Weight (kg)</b>	40	110	130	175	220	275

- (a) On the grid below draw a scatter graph to show this data.  
 (An additional grid, if required, can be found on *Page 14*.)

2



- (b) Draw a line of best fit on the diagram above.
- (c) Use your line of best fit to estimate the age of this calf in days when it weighed 240 kilograms.

1

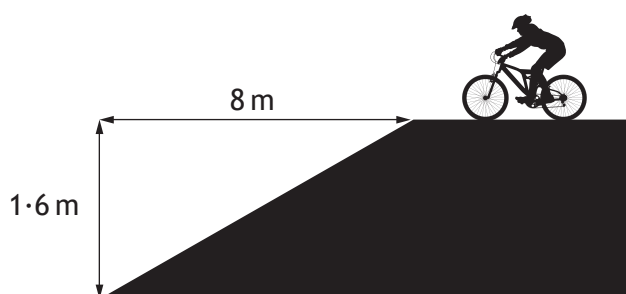
1



4. When classifying mountain bike trails, the gradient of the steepest section is taken into account.

Colour Grade (Difficulty)	Maximum Gradient
Green (Easy)	$\frac{1}{10}$
Blue (Intermediate)	$\frac{3}{20}$
Red (Advanced)	$\frac{1}{4}$
Black (Severe)	$\frac{1}{2}$

A new trail has been built at a mountain bike centre.  
The steepest section of the new trail is shown below.




Can this be classified as a blue trail?  
Use your working to justify your answer.

3



5. Jane is trying to improve the number of pull ups she can do. She looks online for pull up assistance bands.



Jane finds a table explaining which type of bands she should use based on her weight and the number of unassisted pull ups she can do.

The table is shown below.

Unassisted pull ups	Body Weight (pounds)					
	90–120	121–150	151–200	201–250	251–300	300+
0–4	D	D and A	E	F	F	G and A
5–8	C and A	D	E	E	E and B	G
9–11	C	D	D and C	E	E and A	F
12–15	C	C and B	D and B	D and C	E	E and C
16–20	B	C	D	D and B	E	E

Jane weighs herself. She is 10 stone and 1 pound.

**1 stone = 14 pounds**

Jane can do 3 unassisted pull ups.

- (a) Which band(s) does the table recommend that Jane should buy?

1



5. (continued)

Jane's personal trainer, Lynn, wants to buy one of each band A to G.  
The recommended retail prices (RRP) of the bands are shown in the table below.

Band	Colour	RRP
A	Yellow	£2.50
B	Red	£3.90
C	Black	£8.95
D	Purple	£10.95
E	Green	£14.00
F	Blue	£17.00
G	Orange	£18.50

To buy all of the bands individually, the total RRP would be £75.80.  
Lynn considers the following special offers.

Shop 1

*Buy orange, blue, and green bands at RRP*



Shop 2



Shop 3



- (b) Which shop offers the cheapest option for buying one of each band?  
Use your working to justify your answer.

3



6. The mathematics teachers in a school win a lottery.

They decide to share their winnings **in proportion to** the amount they each pay per week.

They each pay the following amounts per week:

Mr Jones                £0.50

Miss Smith            £2.00

Mr Ross                £2.50

Mr Young              £4.00

Mr Young's share is £2 794 000.

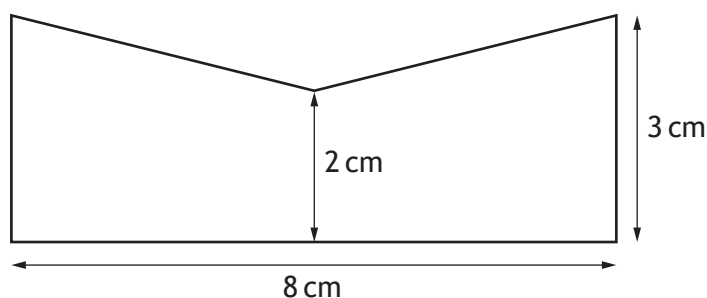
Calculate how much the teachers win in total.

3



\* X 7 4 4 7 5 0 1 0 8 \*

7. Aneesa makes enamelled badges.  
 Each badge is made from metal.  
 The shape of the badge is shown below.



- (a) Calculate the area of the front of each badge. 2

The front of each badge is covered with enamel.  
 The enamel that Aneesa buys costs £90 for one pack.  
 One pack will cover  $180 \text{ cm}^2$ .  
 She makes as many badges as possible from one pack.  
 The metal that she uses costs £3 for each badge.  
 To make a profit, Aneesa adds an extra £17 to the cost of each badge.

- (b) Calculate her selling price for each badge. 3



8. Natalie is donating blood.

Whilst donating blood she notices a chart.

The chart states that not every blood type can be given to every patient.

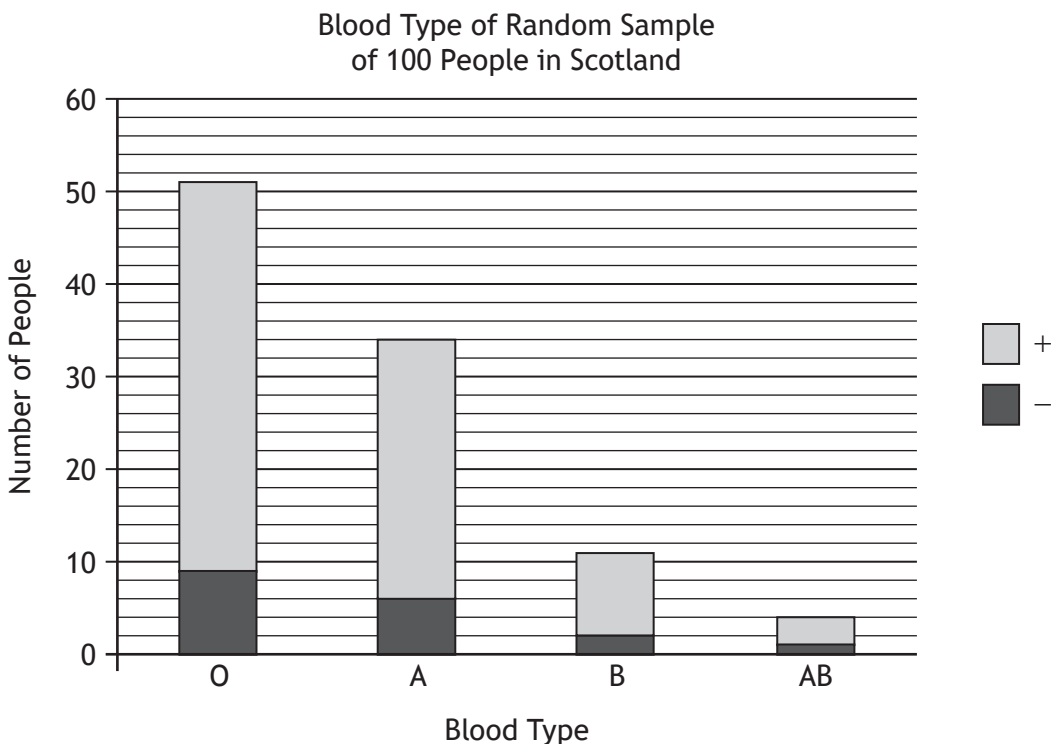
The table shows which patients each blood type can help.

Blood type can be either positive (+) or negative (-).

		Donor's Blood Type							
		O-	O+	B-	B+	A-	A+	AB-	AB+
Patient's Blood Type	AB+	✓	✓	✓	✓	✓	✓	✓	✓
	AB-	✓		✓		✓		✓	
	A+	✓	✓			✓	✓		
	A-	✓				✓			
	B+	✓	✓	✓	✓				
	B-	✓		✓					
	O+	✓	✓						
	O-	✓							

For example the blood of a donor with blood type AB- can only be given safely to a patient with blood type AB+ or AB-.

Natalie then notices a graph showing the blood type of a random sample of 100 people in Scotland.



MARKS

DO NOT  
WRITE IN  
THIS  
MARGIN

8. (continued)

Natalie's blood type is B+.

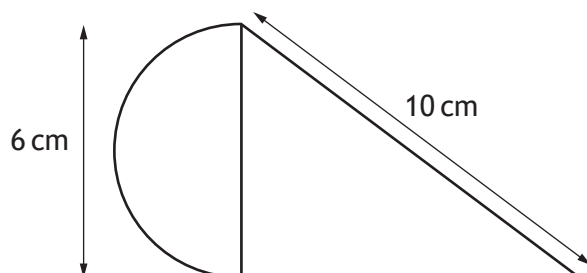
What fraction of the people sampled could safely be given Natalie's blood?

3



\* X 7 4 4 7 5 0 1 1 1 \*

9. A new design is discussed for a glue dispenser.  
It is to be made from two plates of plastic.  
Each plate is in the shape of a right angled triangle and a semi-circle as shown.



- (a) Calculate the perimeter of each plate.  
Use  $\pi = 3.14$ .

4

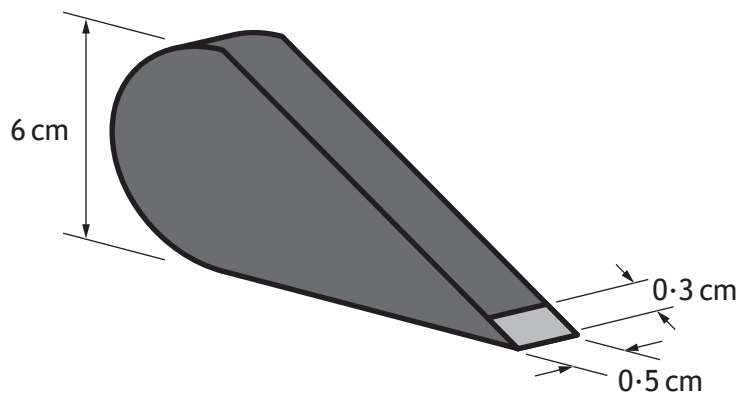


\* X 7 4 4 7 5 0 1 1 2 \*

## 9. (continued)

A rectangular piece of plastic 0.5 cm wide is bent and wrapped around the perimeter of the two plates to join them together.

The rectangular piece of plastic will be 0.3 cm shorter than the perimeter of the shape to allow the glue to flow.



- (b) Calculate the area of the **rectangular** piece of plastic required to hold the plates together.

2

[END OF QUESTION PAPER]



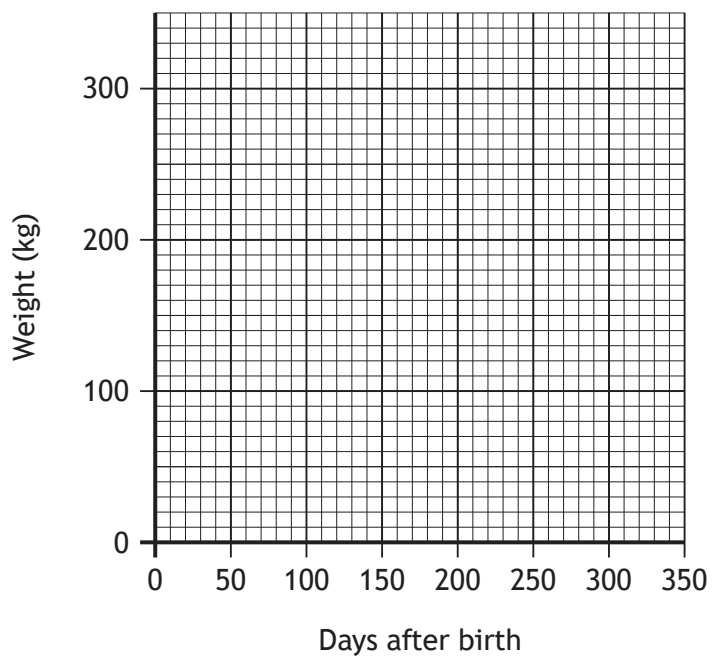
\* X 7 4 4 7 5 0 1 1 3 \*

MARKS

DO NOT  
WRITE IN  
THIS  
MARGIN

ADDITIONAL SPACE FOR ANSWERS

Additional grid for Question 3 (a)



\* X 7 4 4 7 5 0 1 1 4 \*