



National  
Qualifications  
2017

**X713/76/02**

**Chemistry  
Section 1 — Questions**

MONDAY, 8 MAY  
9:00 AM – 11:30 AM

Instructions for the completion of Section 1 are given on *Page 02* of your question and answer booklet X713/76/01.

Record your answers on the answer grid on *Page 03* of your question and answer booklet.

You may refer to the Chemistry Data Booklet for Higher and Advanced Higher.

Before leaving the examination room you must give your question and answer booklet to the Invigilator; if you do not, you may lose all the marks for this paper.



\* X 7 1 3 7 6 0 2 \*

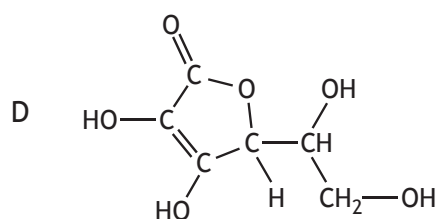
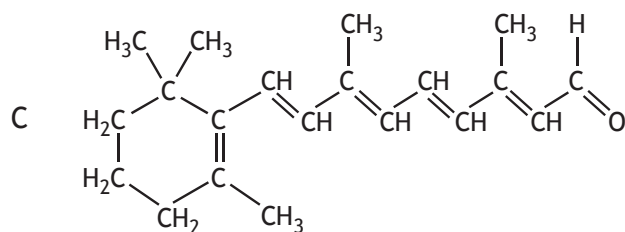
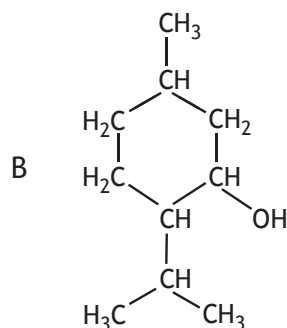
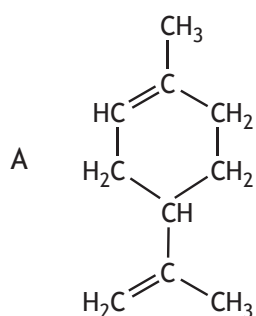
SECTION 1 — 20 marks

Attempt ALL questions

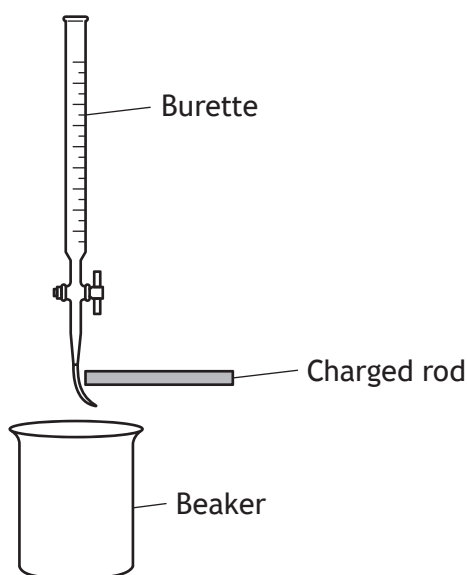
1. Which of the following bonds is the **least** polar?

- A C — I
- B C — F
- C C — Cl
- D C — Br

2. Which of the following compounds would be the **most** water soluble?



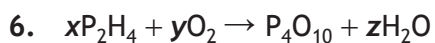
3. Which of the following atoms has the greatest attraction for bonding electrons?
- A Sulfur
  - B Silicon
  - C Nitrogen
  - D Hydrogen
4. Which type of structure is found in phosphorus?
- A Covalent network
  - B Covalent molecular
  - C Monatomic
  - D Metallic lattice
5. The polarity of molecules can be investigated using a charged rod. The charged rod will attract a stream of polar liquid flowing from a burette.



Which of the following liquids would **not** be attracted?

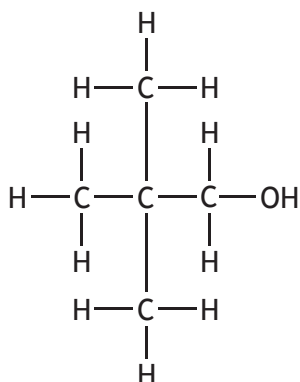
- A Water
- B Propanone
- C Propanol
- D Hexane

[Turn over



The equation is balanced when

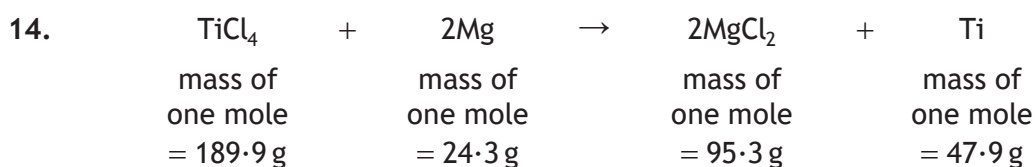
- A  $x = 1, y = 5, z = 4$
  - B  $x = 4, y = 6, z = 2$
  - C  $x = 2, y = 7, z = 4$
  - D  $x = 2, y = 5, z = 2$
7. What is the systematic name for the compound below?



- A 2,2,2-trimethylethanol
  - B 2,2-dimethylpropan-1-ol
  - C 2,2-dimethylpropan-3-ol
  - D 2,2-dimethylpentan-1-ol
8. Which of the following fatty acids is the most unsaturated?
- A  $\text{C}_{15}\text{H}_{29}\text{COOH}$
  - B  $\text{C}_{15}\text{H}_{31}\text{COOH}$
  - C  $\text{C}_{17}\text{H}_{31}\text{COOH}$
  - D  $\text{C}_{17}\text{H}_{35}\text{COOH}$

9. Which of the following is **not** a step in a free radical chain reaction?
- A Activation
  - B Initiation
  - C Propagation
  - D Termination
10. Which of the following is an isomer of ethyl propanoate ( $\text{CH}_3\text{CH}_2\text{COOCH}_2\text{CH}_3$ )?
- A Methyl propanoate
  - B Pentan-2-one
  - C Pentanoic acid
  - D Pentane-1,2-diol
11. Essential oils are
- A non-water soluble, non-volatile compounds
  - B non-water soluble, volatile compounds
  - C water soluble, non-volatile compounds
  - D water soluble, volatile compounds.
12. The enthalpy of combustion of a hydrocarbon is the enthalpy change when
- A one mole of a hydrocarbon burns to give one mole of water
  - B one mole of a hydrocarbon burns to give one mole of carbon dioxide
  - C one mole of a hydrocarbon burns completely in oxygen
  - D one mole of a hydrocarbon burns in one mole of oxygen.
13. Which of the following is the strongest reducing agent?
- A Fluorine
  - B Lithium
  - C Calcium
  - D Iodine

[Turn over



The atom economy for the production of titanium in the above equation is equal to

A  $\frac{47.9}{189.9 + 24.3} \times 100$

B  $\frac{47.9}{189.9 + (2 \times 24.3)} \times 100$

C  $\frac{95.3 + 47.9}{189.9 + 24.3} \times 100$

D  $\frac{(2 \times 47.9)}{189.9 + 24.3} \times 100$

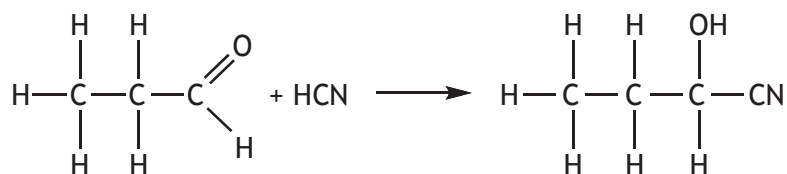
15. The vitamin C content of a carton of orange juice was determined by four students. Each student carried out the experiment three times.

	<i>Experiment 1</i> (mg/100 cm <sup>3</sup> )	<i>Experiment 2</i> (mg/100 cm <sup>3</sup> )	<i>Experiment 3</i> (mg/100 cm <sup>3</sup> )
Student A	30.0	29.0	28.0
Student B	26.4	26.6	26.8
Student C	26.9	27.0	26.9
Student D	26.9	26.5	26.9

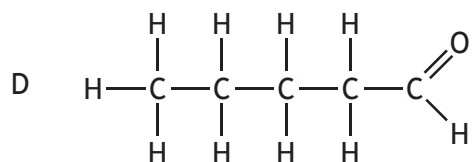
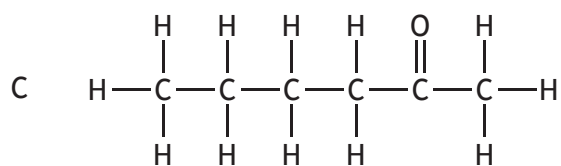
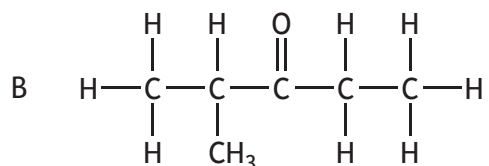
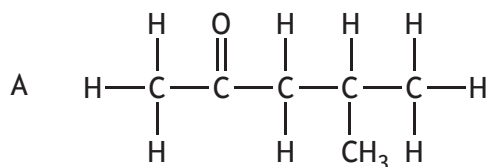
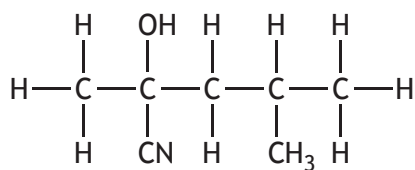
The most reproducible results were obtained by

- A Student A
- B Student B
- C Student C
- D Student D.

16. Cyanohydrin compounds can be made from carbonyl compounds by reacting the carbonyl compound with hydrogen cyanide (HCN).

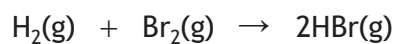


Which carbonyl compound would react with hydrogen cyanide (HCN) to form the following compound?



[Turn over

17. Chemical reactions are in a state of dynamic equilibrium only when
- A the reaction involves no enthalpy change
  - B the concentrations of reactants and products are equal
  - C the activation energies of the forward and backward reactions are equal
  - D the rate of the forward reaction equals that of the backward reaction.
18. Bromine and hydrogen react together to form hydrogen bromide.

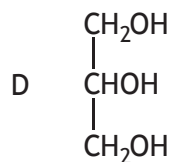
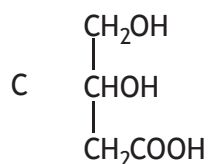
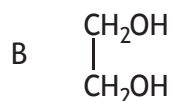
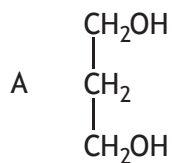


Bonds broken	Bonds made	Bond	Bond enthalpy ( $\text{kJ mol}^{-1}$ )
H—H	$2 \times \text{H—Br}$	H—H	436
Br—Br		Br—Br	194
		H—Br	366

The enthalpy change for this reaction, in  $\text{kJ mol}^{-1}$ , is

- A -102
- B +102
- C -264
- D +264.

19. Which of the following is a structural formula for glycerol?



20. Which line in the table best describes the effect of adding a catalyst to the following reaction?



	<i>Position of equilibrium</i>	<i>Rate of forward reaction</i>
A	unchanged	unchanged
B	unchanged	increased
C	moves to right	unchanged
D	moves to right	increased

[END OF SECTION 1. NOW ATTEMPT THE QUESTIONS IN SECTION 2  
OF YOUR QUESTION AND ANSWER BOOKLET.]

[BLANK PAGE]

DO NOT WRITE ON THIS PAGE

[BLANK PAGE]

DO NOT WRITE ON THIS PAGE

[BLANK PAGE]

DO NOT WRITE ON THIS PAGE

FOR OFFICIAL USE



National  
Qualifications  
2017

Mark

**X713/76/01**

**Chemistry  
Section 1 — Answer Grid  
and Section 2**

MONDAY, 8 MAY  
9:00 AM – 11:30 AM



Fill in these boxes and read what is printed below.

Full name of centre

Town

Forename(s)

Surname

Number of seat

Date of birth

Day

Month

Year

Scottish candidate number

**Total marks — 100**

**SECTION 1 — 20 marks**

Attempt ALL questions.

Instructions for the completion of Section 1 are given on *Page 02*.

**SECTION 2 — 80 marks**

Attempt ALL questions.

You may refer to the Chemistry Data Booklet for Higher and Advanced Higher.

Write your answers clearly in the spaces provided in this booklet. Additional space for answers and rough work is provided at the end of this booklet. If you use this space you must clearly identify the question number you are attempting. Any rough work must be written in this booklet. You should score through your rough work when you have written your final copy.

Use **blue** or **black** ink.

Before leaving the examination room you must give this booklet to the Invigilator; if you do not, you may lose all the marks for this paper.



The questions for Section 1 are contained in the question paper X713/76/02.

Read these and record your answers on the answer grid on *Page 03* opposite.

Use **blue** or **black** ink. Do NOT use gel pens or pencil.

1. The answer to each question is **either** A, B, C or D. Decide what your answer is, then fill in the appropriate bubble (see sample question below).
2. There is **only one correct** answer to each question.
3. Any rough working should be done on the additional space for answers and rough work at the end of this booklet.

### Sample Question

To show that the ink in a ball-pen consists of a mixture of dyes, the method of separation would be:

- A fractional distillation
- B chromatography
- C fractional crystallisation
- D filtration.

The correct answer is **B** — chromatography. The answer **B** bubble has been clearly filled in (see below).

<b>A</b>	<b>B</b>	<b>C</b>	<b>D</b>
<input type="radio"/>	<input checked="" type="radio"/>	<input type="radio"/>	<input type="radio"/>

### Changing an answer

If you decide to change your answer, cancel your first answer by putting a cross through it (see below) and fill in the answer you want. The answer below has been changed to **D**.

<b>A</b>	<b>B</b>	<b>C</b>	<b>D</b>
<input type="radio"/>	<input checked="" type="radio"/>	<input type="radio"/>	<input type="radio"/>

If you then decide to change back to an answer you have already scored out, put a tick (✓) to the **right** of the answer you want, as shown below:

<b>A</b>	<b>B</b>	<b>C</b>	<b>D</b>	or	<b>A</b>	<b>B</b>	<b>C</b>	<b>D</b>
<input type="radio"/>	<input checked="" type="radio"/>	<input type="radio"/>	<input checked="" type="radio"/>		<input type="radio"/>	<input checked="" type="radio"/>	<input type="radio"/>	<input type="radio"/>



SECTION 1 — Answer Grid



	A	B	C	D
1	<input type="radio"/>	<input type="radio"/>	<input type="radio"/>	<input type="radio"/>
2	<input type="radio"/>	<input type="radio"/>	<input type="radio"/>	<input type="radio"/>
3	<input type="radio"/>	<input type="radio"/>	<input type="radio"/>	<input type="radio"/>
4	<input type="radio"/>	<input type="radio"/>	<input type="radio"/>	<input type="radio"/>
5	<input type="radio"/>	<input type="radio"/>	<input type="radio"/>	<input type="radio"/>
6	<input type="radio"/>	<input type="radio"/>	<input type="radio"/>	<input type="radio"/>
7	<input type="radio"/>	<input type="radio"/>	<input type="radio"/>	<input type="radio"/>
8	<input type="radio"/>	<input type="radio"/>	<input type="radio"/>	<input type="radio"/>
9	<input type="radio"/>	<input type="radio"/>	<input type="radio"/>	<input type="radio"/>
10	<input type="radio"/>	<input type="radio"/>	<input type="radio"/>	<input type="radio"/>
11	<input type="radio"/>	<input type="radio"/>	<input type="radio"/>	<input type="radio"/>
12	<input type="radio"/>	<input type="radio"/>	<input type="radio"/>	<input type="radio"/>
13	<input type="radio"/>	<input type="radio"/>	<input type="radio"/>	<input type="radio"/>
14	<input type="radio"/>	<input type="radio"/>	<input type="radio"/>	<input type="radio"/>
15	<input type="radio"/>	<input type="radio"/>	<input type="radio"/>	<input type="radio"/>
16	<input type="radio"/>	<input type="radio"/>	<input type="radio"/>	<input type="radio"/>
17	<input type="radio"/>	<input type="radio"/>	<input type="radio"/>	<input type="radio"/>
18	<input type="radio"/>	<input type="radio"/>	<input type="radio"/>	<input type="radio"/>
19	<input type="radio"/>	<input type="radio"/>	<input type="radio"/>	<input type="radio"/>
20	<input type="radio"/>	<input type="radio"/>	<input type="radio"/>	<input type="radio"/>



[BLANK PAGE]

DO NOT WRITE ON THIS PAGE



\* X 7 1 3 7 6 0 1 0 4 \*

[Turn over for next question

DO NOT WRITE ON THIS PAGE



\* X 7 1 3 7 6 0 1 0 5 \*

SECTION 2 — 80 marks

Attempt ALL questions

1. The elements sodium to argon make up the third period of the Periodic Table.

Na	Mg	Al	Si	P	S	Cl	Ar
----	----	----	----	---	---	----	----

- (a) Name the element from the third period that exists as a covalent network. 1

- (b) Ionisation energy changes across the period.

- (i) Explain why the first ionisation energy increases across the period. 1

- (ii) Write an equation, including state symbols, for the **second** ionisation energy of magnesium. 1

- (iii) The table shows the values for the first four ionisation energies of aluminium.

<i>Ionisation energies (kJ mol<sup>-1</sup>)</i>			
First	Second	Third	Fourth
578	1817	2745	11 577

- Explain why there is a large difference between the third and fourth ionisation energies. 1



\* X 7 1 3 7 6 0 1 0 6 \*

MARKS

DO NOT  
WRITE IN  
THIS  
MARGIN

1. (continued)

(c) The boiling point of chlorine is much higher than that of argon.

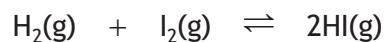
Explain **fully**, in terms of structure and the type of van der Waals forces present, why the boiling point of chlorine is higher than that of argon.

3



\* X 7 1 3 7 6 0 1 0 7 \*

2. Reactions involving iodine are commonly used to investigate rates of reaction.
- (a) One reaction involves hydrogen and iodine reacting together to form hydrogen iodide.

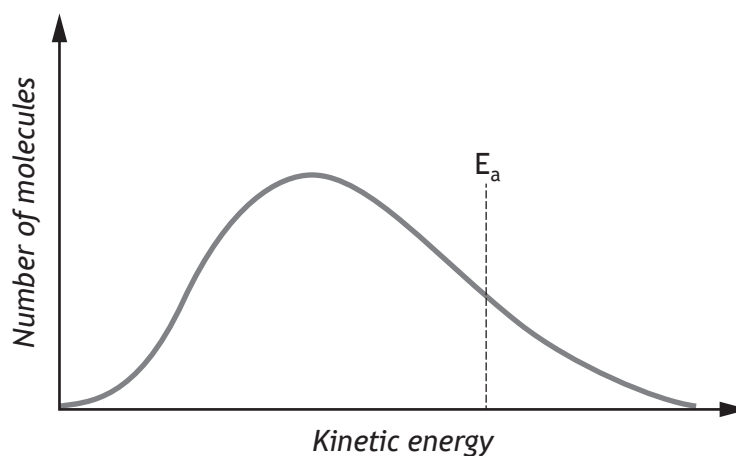


- (i) This reaction is thought to occur by initially breaking bonds in one of the reactants.

Explain, using bond enthalpies, which bond is more likely to break first during this reaction.

1

- (ii) The graph shows the distribution of kinetic energies of reactant molecules in the gas mixture at 300 °C.



Add a second curve to the graph to show the distribution of kinetic energies at 400 °C.

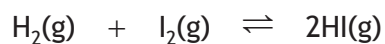
1

(An additional graph, if required, can be found on *Page 35*)



2. (a) (continued)

(iii) The reaction to produce hydrogen iodide is exothermic.



(A) State the effect of increasing temperature on the position of equilibrium.

1

(B) State why changing the pressure has no effect on this equilibrium reaction.

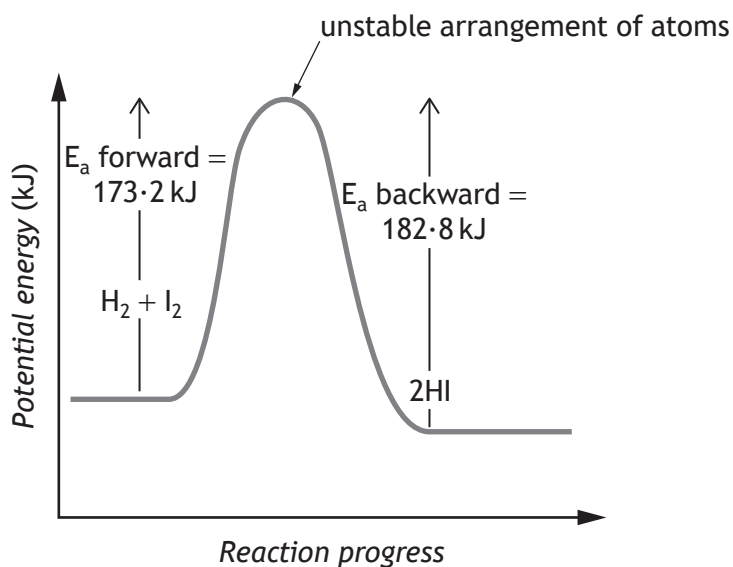
1



\* X 7 1 3 7 6 0 1 0 9 \*

2. (a) (continued)

(iv) The potential energy diagram for the reaction between hydrogen and iodine is shown.



- (A) State the term for the unstable arrangement of atoms. 1
- (B) Calculate the enthalpy change, in kJ, for the forward reaction. 1
- (C) Platinum can be used as a catalyst for this reaction.  
State the effect that platinum would have on the activation energy for the reaction. 1



2. (continued)

- (b) The reaction between iodide ions,  $I^{-}(aq)$ , and persulfate ions,  $S_2O_8^{2-}(aq)$ , is used to investigate the effect of changing concentration on rate of reaction. The relative rate of the reaction is determined by mixing the reactants in a beaker and recording the time taken for the mixture to change colour.

The results of the investigation are shown in the table.

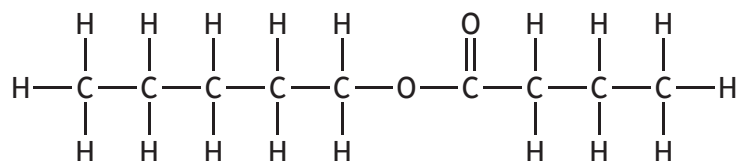
Experiment	Concentration of $I^{-}(aq)$ (mol l <sup>-1</sup> )	Concentration of $S_2O_8^{2-}(aq)$ (mol l <sup>-1</sup> )	Time (s)	Relative rate (s <sup>-1</sup> )
1	0.04	0.05	241	0.00415
2	0.06	0.05	180	0.00556
3	0.08	0.05		0.00819
4	0.1	0.05	103	0.00971

- (i) The instructions state that a dry beaker must be used for each experiment.  
Suggest a reason why the beaker should be dry. 1
- (ii) Calculate the time, in seconds, for the reaction in experiment 3. 1
- (iii) Explain why decreasing the concentration of iodide ions lowers the reaction rate. 1





4. Pentyl butanoate is responsible for some of the flavour in apricots and strawberries.



- (a) Hydrolysis of pentyl butanoate using sodium hydroxide produces an alcohol and the salt of the carboxylic acid.

(i) Name the alcohol that would be formed when pentyl butanoate is hydrolysed. 1

(ii) Draw a structural formula for the sodium salt of the carboxylic acid that would be formed. 1

- (b) Fats and oils belong to the same class of compounds as pentyl butanoate.

(i) Name this class of compounds. 1

(ii) When a fat is hydrolysed using sodium hydroxide, sodium salts of fatty acids are produced.

State a use for sodium salts of fatty acids. 1




\* X 7 1 3 7 6 0 1 1 3 \*

4. (b) (continued)

(iii) Hydrolysis of fats using hydrochloric acid produces fatty acids. Stearic acid is a fatty acid that can be made from hydrolysis of beef fat. It is a fuel sometimes found in fireworks.

During combustion, stearic acid ( $C_{17}H_{35}COOH$ ) produces 623 kJ of energy per mole of  $CO_2$  produced.



mass of  
one mole  
= 284 g

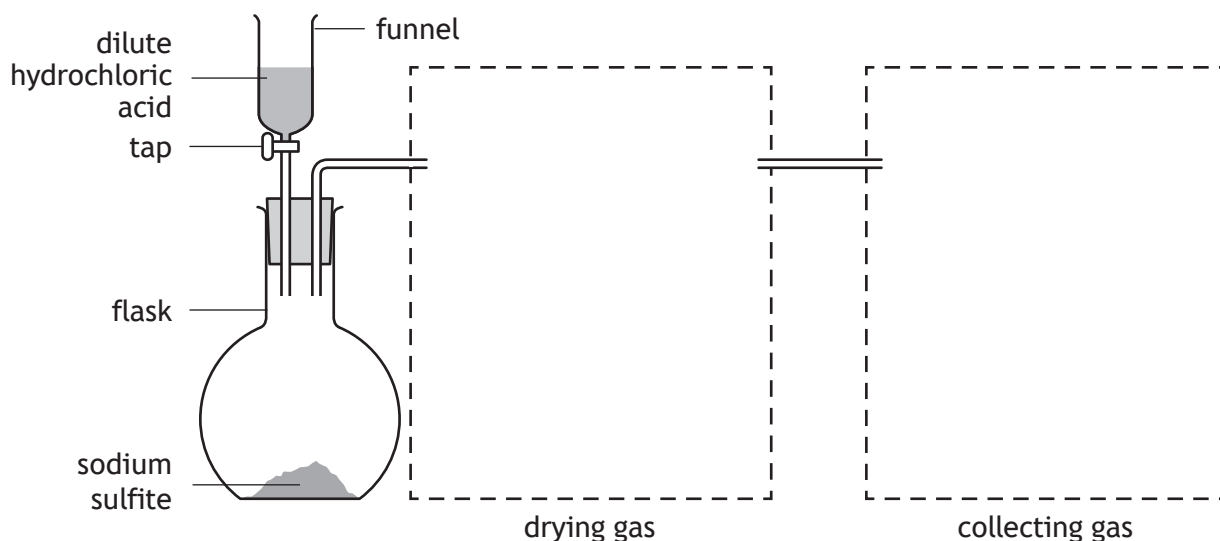
Calculate the energy released, in kJ, by combustion of 10 grams of stearic acid.

2



5. Sulfur dioxide is a colourless, toxic gas that is soluble in water and more dense than air.

(a) One laboratory method for preparation of sulfur dioxide gas involves adding dilute hydrochloric acid to solid sodium sulfite. The sulfur dioxide gas produced is dried by bubbling the gas through concentrated sulfuric acid. The sulfur dioxide gas can then be collected.



- (i) Complete the diagram by drawing:  
in the first box, apparatus suitable for drying the sulfur dioxide gas;  
in the second box, apparatus suitable for collecting the gas.  
(An additional diagram, if required, can be found on *Page 35*)

**MARKS** DO NOT WRITE IN THIS MARGIN

2



5. (a) (continued)

- (ii) 0.40 g of sodium sulfite,  $\text{Na}_2\text{SO}_3$ , is reacted with  $50\text{ cm}^3$  of dilute hydrochloric acid, concentration  $1.0\text{ mol l}^{-1}$ .




mass of  
one mole  
=  $126.1\text{ g}$

Show, by calculation, that sodium sulfite is the limiting reactant.

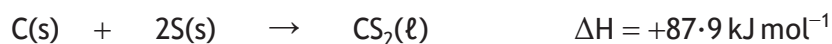
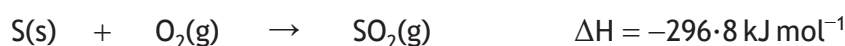
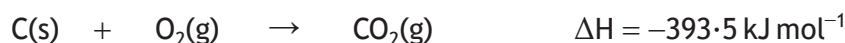
2

- (b) Another reaction that produces sulfur dioxide gas involves combustion of carbon disulfide in the reaction shown.



Calculate the enthalpy change, in  $\text{kJ mol}^{-1}$ , for this reaction using the following information.

2

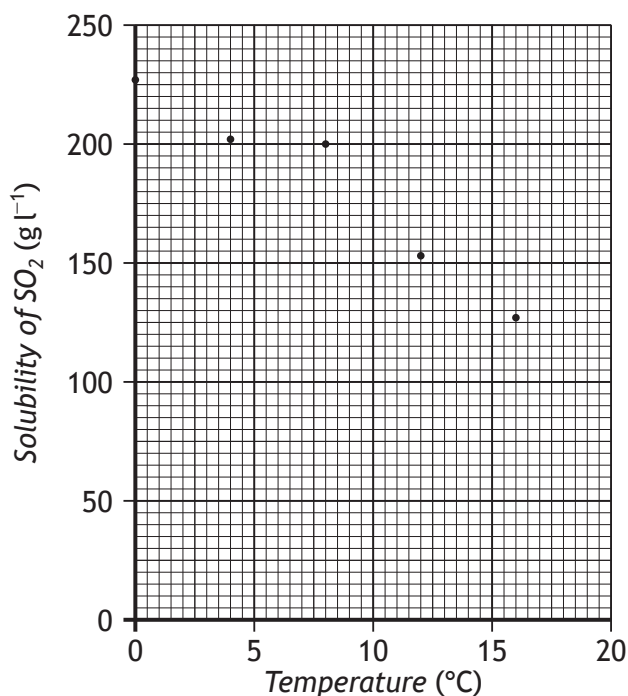


\* X 7 1 3 7 6 0 1 1 6 \*

## 5. (continued)

MARKS  
DO NOT  
WRITE IN  
THIS  
MARGIN

- (c) The graph shows results for an experiment to determine the solubility of sulfur dioxide in water.



- (i) Determine the solubility of sulfur dioxide, in g l<sup>-1</sup>, in water at 10 °C. 1
- (ii) Information about sulfur dioxide and carbon dioxide is shown in the table.

	Shape of molecule	Electronegativity difference between elements	Solubility in water at 25 °C (g l <sup>-1</sup> )
carbon dioxide	linear O=C=O	1.0	1.45
sulfur dioxide	bent O=S=O	1.0	94

Explain **fully** why carbon dioxide is much less soluble in water than sulfur dioxide is in water.

2



\* X 7 1 3 7 6 0 1 1 7 \*

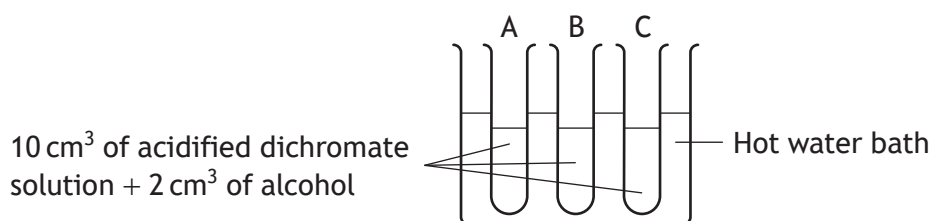
6. A student was carrying out an investigation into alcohols, aldehydes and ketones.

(a) The student was given three alcohols labelled as A, B and C. These alcohols were all isomers with the formula  $C_4H_9OH$ .

(i) Draw a structural formula for the secondary alcohol with the formula  $C_4H_9OH$ .

1

(ii) The student set up the following experiment.



Alcohol	Observation
A	Colour change
B	No change
C	Colour change

(A) Suggest why a water bath is an appropriate method of heating the reaction mixture.

1

(B) Describe the colour change that would have been observed with alcohols A and C.

1

(C) Alcohol B is not oxidised.

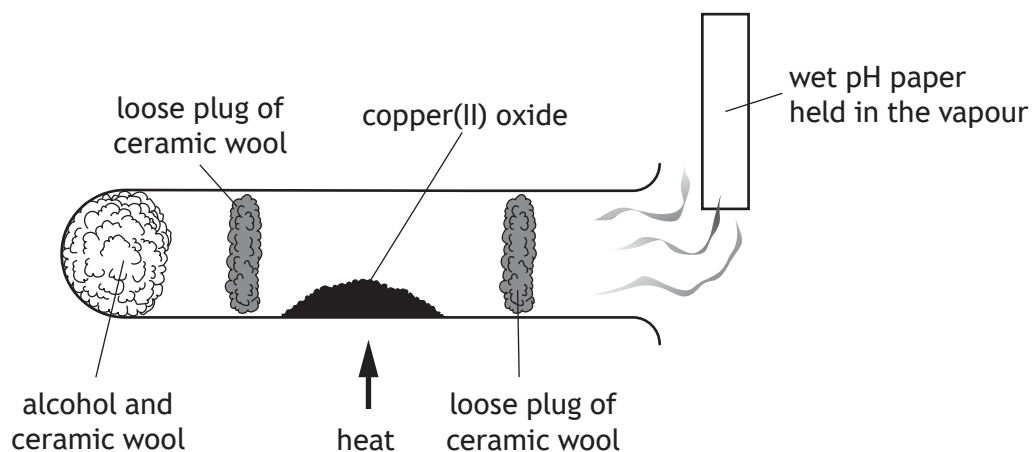
State the **type** of alcohol which cannot be oxidised by acidified dichromate solution.

1



6. (a) (continued)

(iii) The student set up a second experiment with alcohol A.



Hot copper(II) oxide is an oxidising agent.

(A) When alcohol A ( $C_4H_9OH$ ) is oxidised the product turns the pH paper red.

Suggest a name for the product.

1

(B) Complete the ion-electron equation for the oxidation reaction.

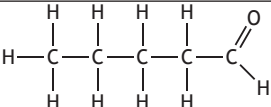
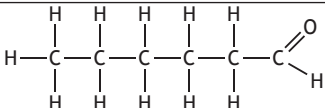
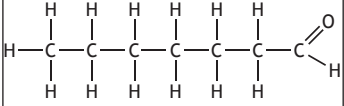
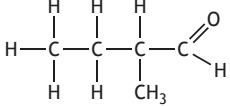
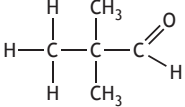
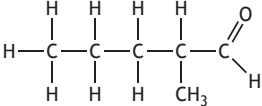
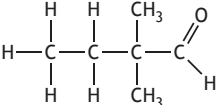
1



## 6. (continued)

MARKS  
DO NOT  
WRITE IN  
THIS  
MARGIN

- (b) The student found the following information about the boiling points of some aldehydes.

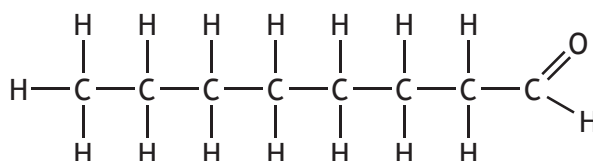
Aldehyde	Molecular formula	Boiling point (°C)
	C <sub>5</sub> H <sub>10</sub> O	102
	C <sub>6</sub> H <sub>12</sub> O	130
	C <sub>7</sub> H <sub>14</sub> O	153
	C <sub>5</sub> H <sub>10</sub> O	95
	C <sub>5</sub> H <sub>10</sub> O	75
	C <sub>6</sub> H <sub>12</sub> O	119
	C <sub>6</sub> H <sub>12</sub> O	111

- (i) Name the aldehyde that has a boiling point of 119 °C.

1

- (ii) Predict the boiling point, in °C, of the following molecule.

1



\* X 7 1 3 7 6 0 1 2 0 \*

6. (b) (continued)

(iii) Using information from the table, describe one way in which differences in structure affect the boiling point of **isomeric** aldehydes.

1

(iv) State what would be observed when an aldehyde is gently heated with Tollens' reagent.

1

(c) Ketones contain a carbonyl group.

Name the type of intermolecular interaction between ketone molecules.

1



\* X 7 1 3 7 6 0 1 2 1 \*

7. Some people take iron tablets as a dietary supplement. Iron tablets may contain iron(II) sulfate.

(a) A student was investigating the iron(II) content of iron tablets. A work card gave the following instructions for preparing an iron tablet solution.

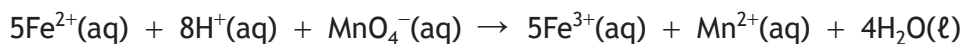
1. Add five iron tablets to about 50 cm<sup>3</sup> of dilute sulfuric acid in a small beaker and stir to dissolve.
2. Transfer quantitatively to a 100 cm<sup>3</sup> volumetric flask.
3. Make up the solution to the graduation mark on the volumetric flask.
4. Stopper the flask and then invert it to mix the solution.

To 'transfer quantitatively' means that all of the iron tablet solution must be transferred into the volumetric flask.

Describe how this is carried out in practice.

1

(b) The concentration of iron(II) ions (Fe<sup>2+</sup>) in this iron tablet solution can be determined by a redox titration with permanganate (MnO<sub>4</sub><sup>-</sup>) solution.



(i) Suggest why it is **not** necessary to add an indicator to this titration.

1



7. (b) (continued)

(ii) Suggest why the titration must be carried out under acidic conditions.

1

(iii) Three 25.0 cm<sup>3</sup> samples of the iron tablet solution were titrated with a standard solution of 0.020 mol l<sup>-1</sup> permanganate (MnO<sub>4</sub><sup>-</sup>). The results are shown below.

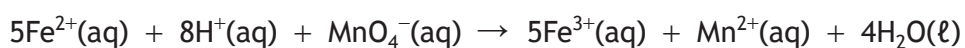
Sample	Volume of permanganate (cm <sup>3</sup> )
1	14.9
2	14.5
3	14.6

(A) State why the volume of permanganate used in the calculation was taken to be 14.55 cm<sup>3</sup>, although this is not the average of the three titres in the table.

1

(B) Calculate the concentration, in mol l<sup>-1</sup>, of iron(II) ions in the iron tablet solution.

3



\* X 7 1 3 7 6 0 1 2 3 \*

7. (b) (iii) (continued)

(C) State what is meant by the term **standard solution**. 1

(D) Name an appropriate piece of apparatus which could be used to measure 25.0 cm<sup>3</sup> samples of iron tablet solution. 1

(c) In a different experiment, five iron tablets were found to contain 0.00126 moles of iron(II) ions.  
Calculate the average mass, in mg, of iron present in one tablet. 1

(d) It is recommended an adult female takes in 14.8 mg of iron per day.  
100 g of a breakfast cereal contains 12.0 mg of iron.  
Calculate the percentage of the recommended daily amount of iron provided for an adult female by a 30 g serving. 2



8. Skin care products contain a mixture of polar covalent, non-polar covalent and ionic compounds. The compounds need to stay mixed within the product.

Skin care products also need to spread easily and remain on the skin for a period of time, as well as provide physical and chemical protection from the sun. In order to do this, skin care products contain a range of chemicals including water, fats and oils, antioxidants, minerals and sun block.

**Using your knowledge of chemistry**, explain the role of different chemicals in skin care products.

3



\* X 7 1 3 7 6 0 1 2 5 \*

[BLANK PAGE]

DO NOT WRITE ON THIS PAGE



\* X 7 1 3 7 6 0 1 2 6 \*

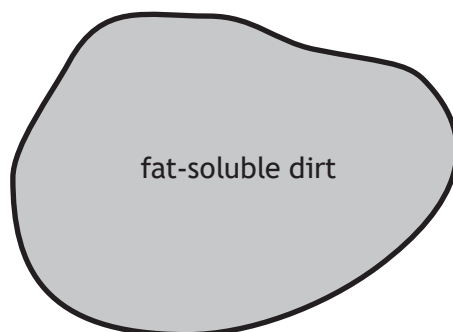
9. Dishwasher tablets contain chemicals which remove dirt from dishes.
- (a) Dishwasher tablets include detergents. These molecules act like soaps to allow mixing of fat-soluble dirt and water.
- (i) During the cleaning process, the detergent molecules combine with fat-soluble dirt.

A simplified diagram of a detergent molecule is shown.



Complete the diagram below to show how detergent molecules combine with fat-soluble dirt.

1



(An additional diagram, if required, can be found on *Page 36*)

- (ii) State the term used to describe the non-polar, hydrocarbon tail of a detergent molecule.

1



\* X 7 1 3 7 6 0 1 2 7 \*

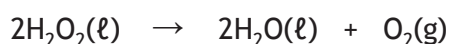
9. (continued)

(b) Dishwasher tablets produce the bleach hydrogen peroxide, H<sub>2</sub>O<sub>2</sub>. One action of this oxidising agent is to oxidise food.

(i) Suggest another action of the bleach produced by the dishwasher tablets.

1

(ii) Hydrogen peroxide decomposes to form water and oxygen.



A dishwasher tablet produces 0.051 g of hydrogen peroxide (mass of one mole = 34 g).

Calculate the volume of oxygen that would be produced when 0.051 g of hydrogen peroxide decomposes.

3

*Take the volume of 1 mole of oxygen gas to be 24 litres.*

(c) Enzymes are commonly added to dishwasher tablets. These are used to break down proteins.

(i) The proteins are broken down into small, water-soluble molecules.

Name the small, water-soluble molecules made when proteins are broken down completely.

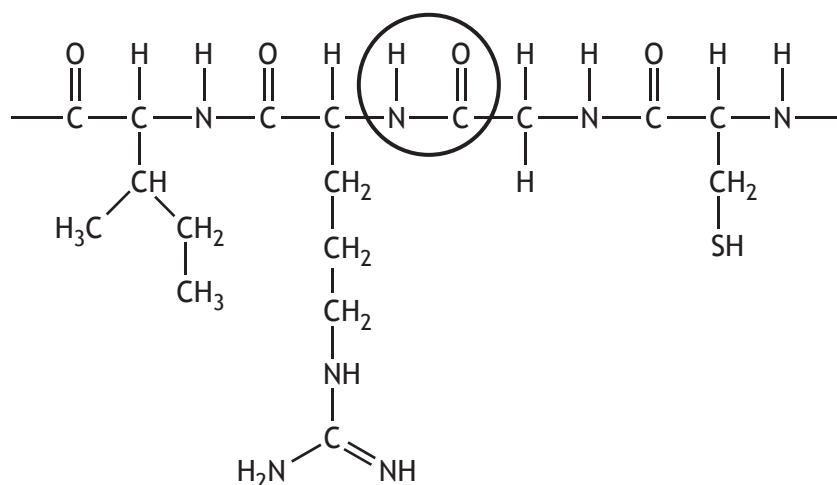
1



\* X 7 1 3 7 6 0 1 2 8 \*

9. (c) (continued)

- (ii) The structure of a section of protein chain found in egg white is shown.



(A) Name the functional group circled. 1

(B) Draw a structural formula for **one** of the molecules that would be made when this section of egg white protein chain is completely broken down. 1

- (iii) As part of the program in the dishwasher, the conditions in the dishwasher change so that the enzyme molecules no longer work because they change shape.

(A) State the term used to describe the change in shape of enzyme molecules. 1

(B) Suggest a change in conditions which would cause the enzyme molecules to change shape. 1

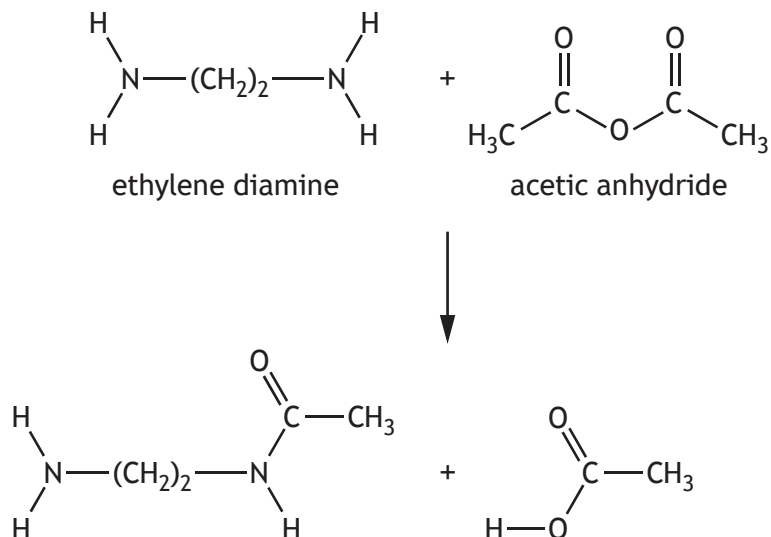


9. (continued)

(d) A bleach activator is frequently added to dishwasher tablets to speed up the bleaching reaction. One common bleach activator is TAED.

TAED could be produced in a process which involves a number of stages.

(i) The first stage in producing TAED is shown below.



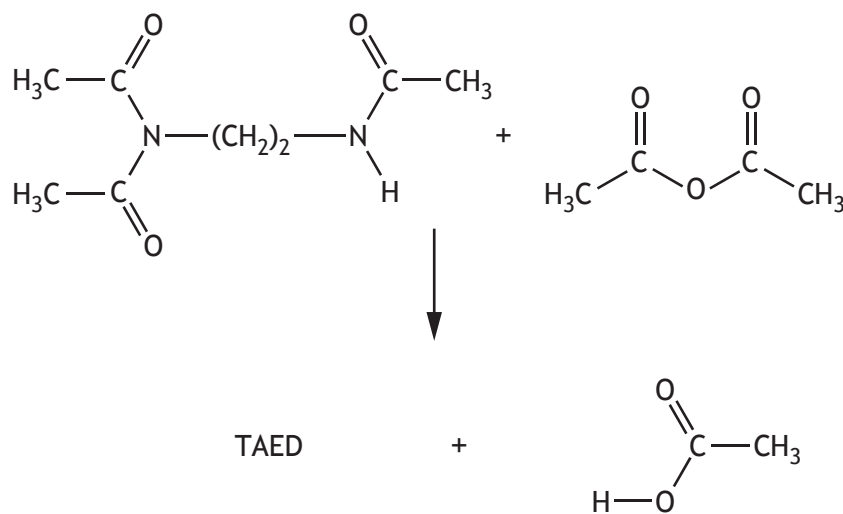
Suggest a name for this type of reaction.

1



9. (d) (continued)

(ii) The final stage in the process producing TAED is shown below.



Draw a structural formula for TAED.

1

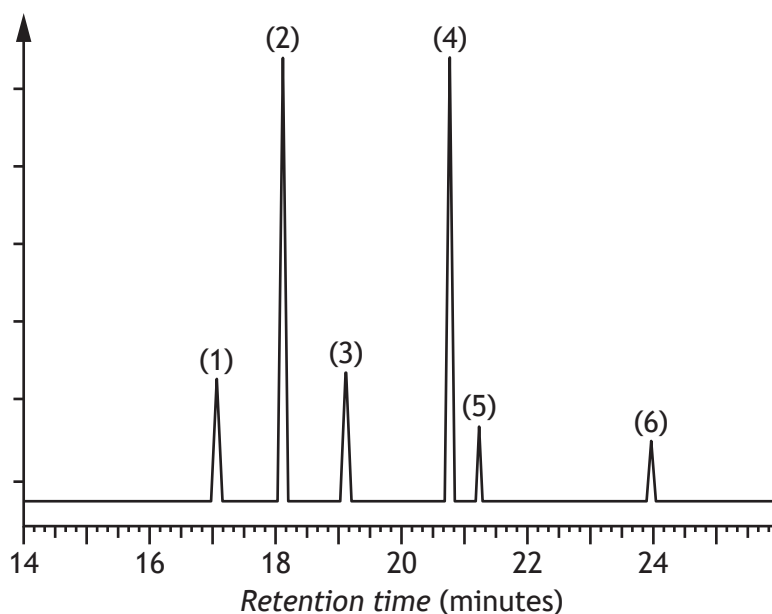


10. Essential oils from the lavender plant are used in aromatherapy.

MARKS  
DO NOT WRITE IN THIS MARGIN

- (a) Gas chromatography can be used to separate and identify the organic compounds in lavender oils.

Chromatogram 1 - Lavender oil A



Peak	Component	Component peak area
1	1,8-cineole	7432
2	linalool	31 909
3	camphor	7518
4	linalyl acetate	27 504
5	geranyl acetate	3585
6	farnesene	1362

Total peak area = 79 310

The relative concentration of each component can be calculated using the following formula.

$$\text{Relative concentration} = \frac{\text{Component peak area}}{\text{Total peak area}} \times 100 (\%)$$

- (i) Calculate the relative concentration of linalool in lavender oil A.

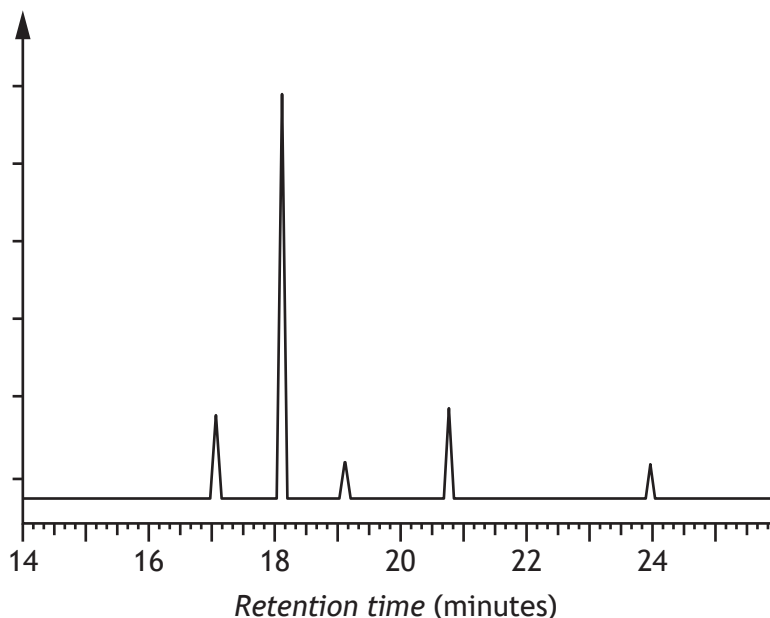
1



10. (a) (continued)

(ii) Different varieties of lavender oils have different compositions.

Chromatogram 2 – Lavender oil B



Identify the component found in lavender oil A that is missing from lavender oil B.

1

(b) A brand of mouthwash contains the component 1,8-cineole at a concentration of  $0.92 \text{ mg per cm}^3$ . The cost of  $1 \text{ kg}$  of 1,8-cineole is  $\text{£}59.10$ . Calculate the cost, in pence, of 1,8-cineole that is present in a  $500 \text{ cm}^3$  bottle of this brand of mouthwash.

2

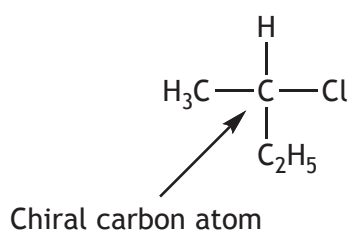


10. (continued)

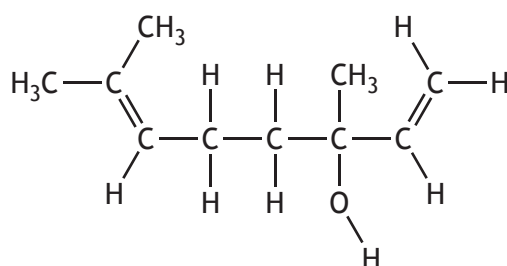
(c) The component molecules found in lavender oils are terpenes or terpenoids.

(i) A chiral carbon is a carbon atom attached to **four** different atoms or groups of atoms.

An example is shown below.



A molecule of the terpenoid linalool has a chiral carbon. Linalool has the following structure.



Circle the chiral carbon atom in the linalool structure.

1

(An additional diagram, if required, can be found on *Page 36*)

(ii) Farnesene is a terpene consisting of **three** isoprene units (2-methylbuta-1,3-diene) joined together.

Write the molecular formula of farnesene.

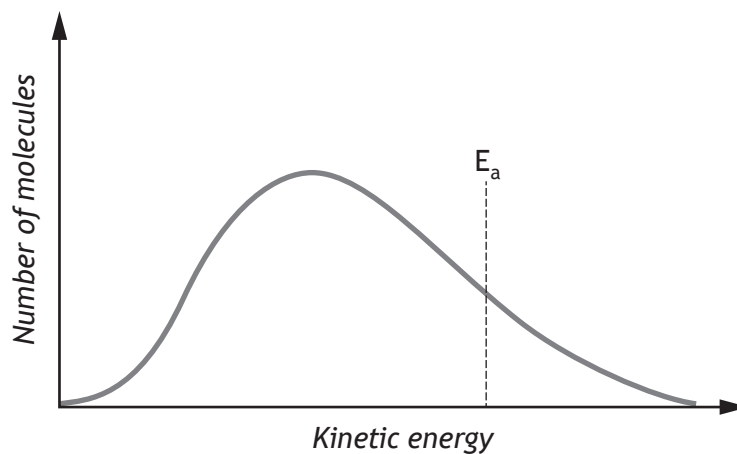
1

[END OF QUESTION PAPER]

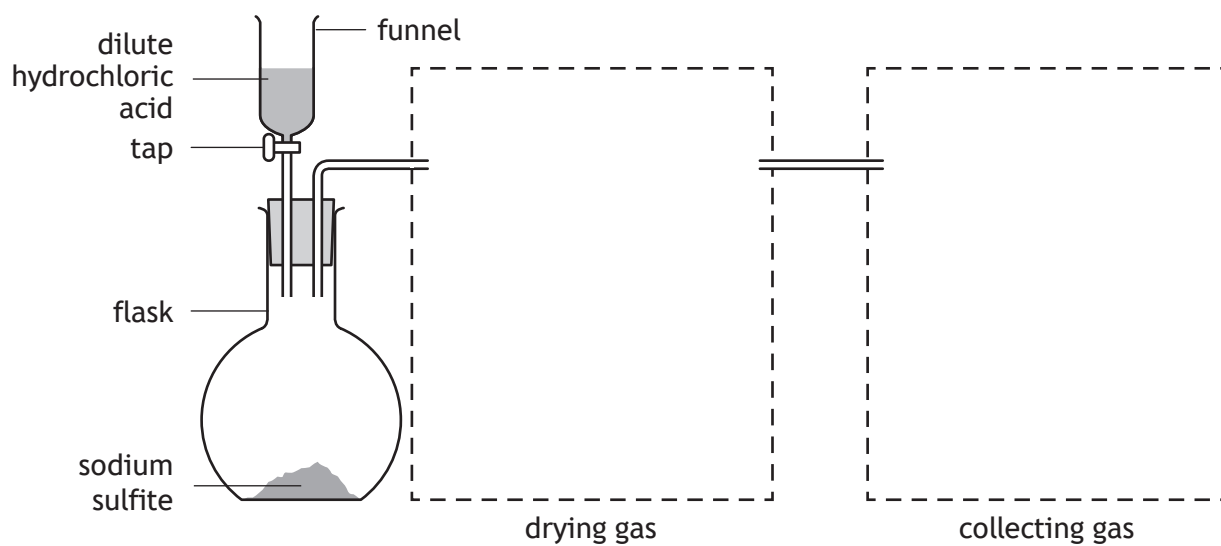


ADDITIONAL SPACE FOR ANSWERS AND ROUGH WORK

ADDITIONAL DIAGRAM FOR USE IN QUESTION 2 (a) (ii)

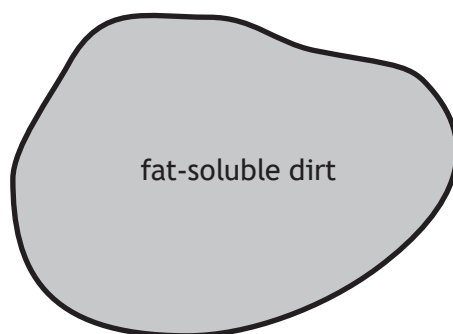


ADDITIONAL DIAGRAM FOR USE IN QUESTION 5 (a) (i)

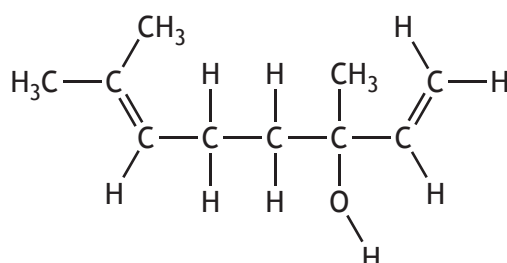


ADDITIONAL SPACE FOR ANSWERS AND ROUGH WORK

ADDITIONAL DIAGRAM FOR USE IN QUESTION 9 (a) (i)



ADDITIONAL DIAGRAM FOR USE IN QUESTION 10 (c) (i)



MARKS

DO NOT  
WRITE IN  
THIS  
MARGIN

ADDITIONAL SPACE FOR ANSWERS AND ROUGH WORK



\* X 7 1 3 7 6 0 1 3 7 \*

MARKS

DO NOT  
WRITE IN  
THIS  
MARGIN

ADDITIONAL SPACE FOR ANSWERS AND ROUGH WORK



\* X 7 1 3 7 6 0 1 3 8 \*

[BLANK PAGE]

DO NOT WRITE ON THIS PAGE



\* X 7 1 3 7 6 0 1 3 9 \*

[BLANK PAGE]

DO NOT WRITE ON THIS PAGE



\* X 7 1 3 7 6 0 1 4 0 \*